

STUDY LINK
5•2

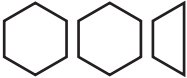
Fraction and Mixed-Number Practice


Unit

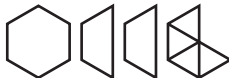
hexagon



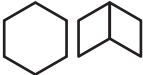
For the problems below, the hexagon is worth 1.
 Write the mixed-number name and the fraction name
 shown by each diagram.

1.  Mixed number _____

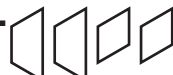
Fraction _____

2.  Mixed number _____


Fraction _____

3.  Mixed number _____

Fraction _____

4.  Mixed number _____

Fraction _____

5.  Mixed number _____

Fraction _____

6. Make up a mixed-number problem of your own in the space below.

Practice

7. $7 \overline{)1,834}$ _____

8. $6 \overline{)196} \rightarrow$ _____

9. $8 \overline{)984}$ _____

10. $9 \overline{)651} \rightarrow$ _____