

STUDY LINK
2•9

Multiply with the Lattice Method



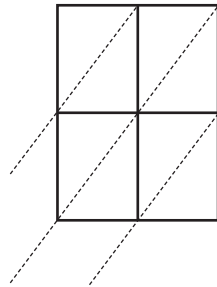
For each problem:

- ◆ Make a magnitude estimate. Circle the appropriate box.
- ◆ Solve using the lattice method. Show your work in the grids.



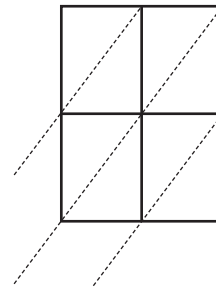
1. $94 * 73 =$ _____

10s	100s	1,000s	10,000s
-----	------	--------	---------



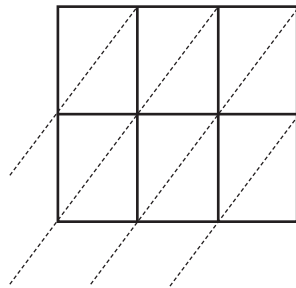
2. $24 * 3.7 =$ _____

0.1s	1s	10s	100s
------	----	-----	------



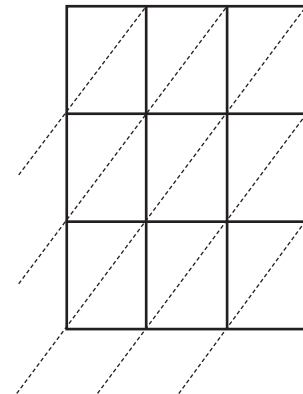
3. $5.4 * 6.18 =$ _____

0.1s	1s	10s	100s
------	----	-----	------



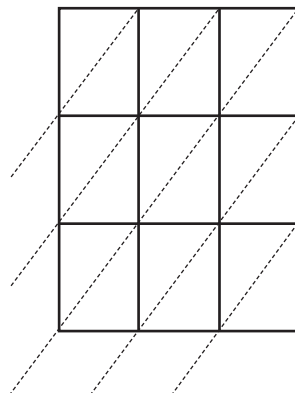
4. $384 * 261 =$ _____

100s	1,000s	10,000s	100,000s
------	--------	---------	----------



5. $17.7 * 19.3 =$ _____

0.1s	1s	10s	100s
------	----	-----	------



Practice

6. $7,402 + 2,587 =$ _____

7. $37 \div 7 \rightarrow$ _____

8. $328 - 237 =$ _____

9. $\$15.75 + \$3.25 =$ _____