

Name: \_\_\_\_\_

Score: \_\_\_\_\_

## Prime Factor Tree

Draw a prime factor tree for each number.

1) 12

2) 32

3) 40

4) 28

5) 18

6) 44

Name: \_\_\_\_\_

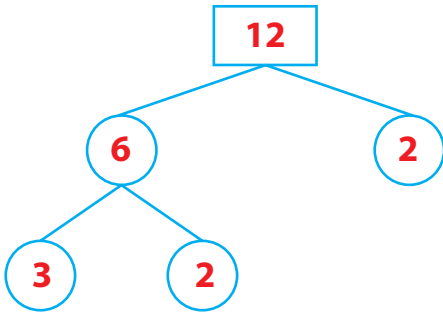
Score: \_\_\_\_\_

## Answer Key

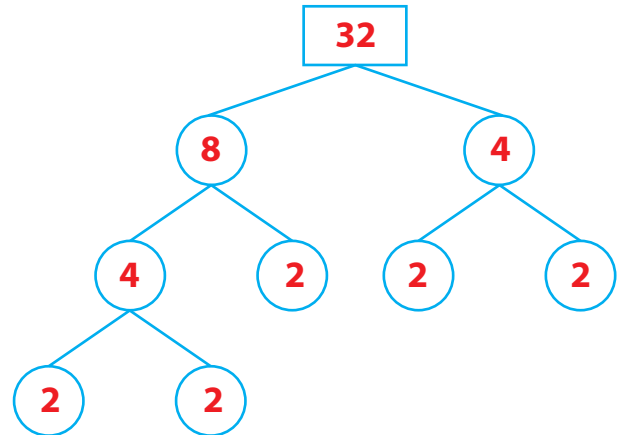
### Prime Factor Tree

Draw a prime factor tree for each number. (diagrammatic representation may vary)

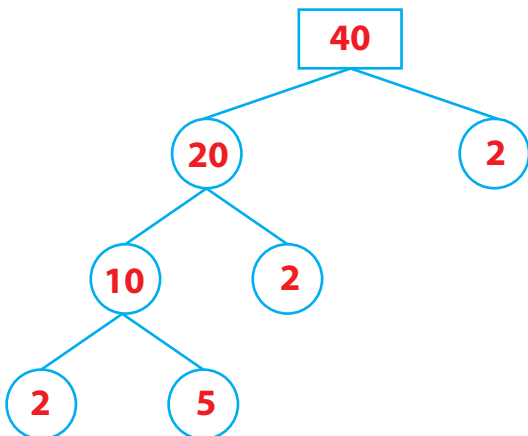
1) 12



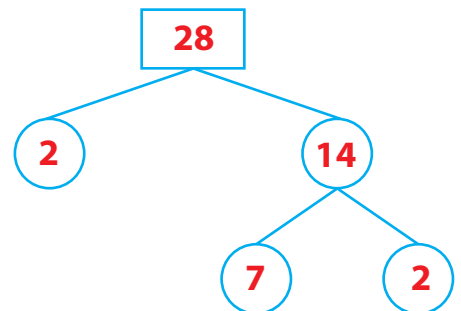
2) 32



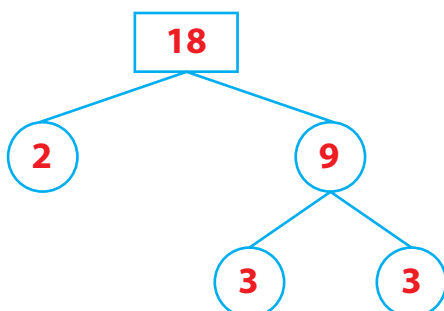
3) 40



4) 28



5) 18



6) 44

